


Finding Area by Counting Squares

Name: _____

Date: _____


Instructions: Count the unit squares inside each shape to find its area. Each small square = 1 square unit.

1. Rectangle




Area = _____ square units

2. Square



Area = _____ square units

3. L-Shape




Area = _____ square units

4. Rectangle




Area = _____ square units

5. T-Shape




Area = _____ square units

6. Rectangle



Area = _____ square units

7. Challenge: Draw your own shape on the grid below and find its area.



Area of my shape = _____ square units