

# Counting Sides and Corners

Name: \_\_\_\_\_ Date: \_\_\_\_\_

---

**Instructions:** Count the number of sides and corners for each shape. Write your answers in the spaces provided.



**Triangle**

Sides: \_\_\_\_\_

Corners: \_\_\_\_\_



**Square**

Sides: \_\_\_\_\_


Corners: \_\_\_\_\_



**Rectangle**

Sides: \_\_\_\_\_


Corners: \_\_\_\_\_



**Pentagon**

Sides: \_\_\_\_\_


Corners: \_\_\_\_\_



**Hexagon**

Sides: \_\_\_\_\_

Corners: \_\_\_\_\_



**Circle**

Sides: \_\_\_\_\_

Corners: \_\_\_\_\_

 **Challenge Question:**

What do you notice about the number of sides and corners on each shape?

---

---