

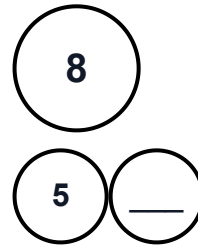
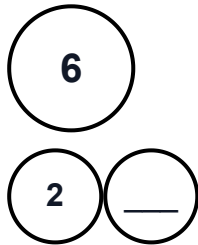
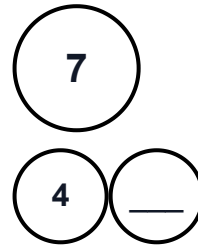
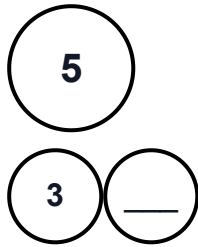
# Addition Facts Using Number Bonds

Name: \_\_\_\_\_

Date: \_\_\_\_\_

Complete the number bonds and solve the addition problems.

## Part 1: Complete the Number Bonds



## Part 2: Solve the Addition Problems

$3 + 2 = \underline{\quad}$

$4 + 3 = \underline{\quad}$

$2 + 4 = \underline{\quad}$

$5 + 3 = \underline{\quad}$

$1 + 5 = \underline{\quad}$

$2 + 6 = \underline{\quad}$

$4 + 4 = \underline{\quad}$

$3 + 5 = \underline{\quad}$

$2 + 7 = \underline{\quad}$

$1 + 8 = \underline{\quad}$

## Part 3: Word Problems

1. Sarah has 3 apples 🍎. Her friend gives her 4 more apples. How many apples does Sarah have now?

$3 + 4 = \underline{\quad}$

2. There are 5 ducks 🦆 in the pond. 2 more ducks swim over. How many ducks are there altogether?

$5 + 2 = \underline{\quad}$