



Number Bonds to 5


Name: _____


Date: _____

Complete the number bonds. Draw circles to help you!


 $3 + \underline{\quad} = 5$


 $1 + \underline{\quad} = 5$


 $4 + \underline{\quad} = 5$


 $2 + \underline{\quad} = 5$

Fill in the missing numbers:

$0 + \underline{\quad} = 5$

$5 + \underline{\quad} = 5$

$1 + \underline{\quad} = 5$

$\underline{\quad} + 1 = 5$

$2 + \underline{\quad} = 5$

$\underline{\quad} + 2 = 5$

$3 + \underline{\quad} = 5$

$\underline{\quad} + 4 = 5$

Write all the number bonds to 5:

$\underline{\quad} + \underline{\quad} = 5$

$\underline{\quad} + \underline{\quad} = 5$

$\underline{\quad} + \underline{\quad} = 5$

$\underline{\quad} + \underline{\quad} = 5$

$\underline{\quad} + \underline{\quad} = 5$

$\underline{\quad} + \underline{\quad} = 5$