

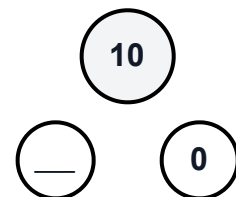
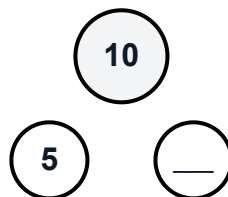
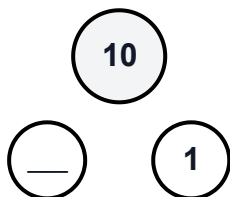
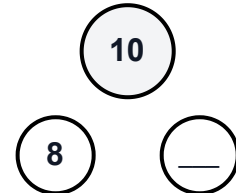
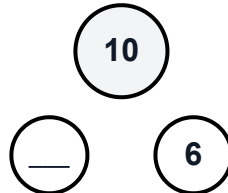
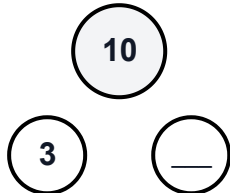
Number Bonds to 10

Name: _____

Date: _____

Fill in the missing numbers to make 10.

Number Bond Circles



Number Sentences

$2 + \underline{\quad} = 10$

$7 + \underline{\quad} = 10$

$\underline{\quad} + 4 = 10$

$\underline{\quad} + 9 = 10$

$5 + \underline{\quad} = 10$

$10 + \underline{\quad} = 10$

Complete the Pairs

3 and make 10

 and 8 make 10

6 and make 10

 and 1 make 10