


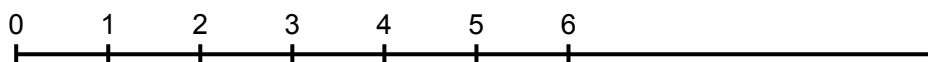
Doubles on a Number Line

Name: _____


Date: _____

 Use the number lines to help you solve the doubles problems. Draw jumps to show your thinking!


1. Double 2 = $2 + 2 =$ _____



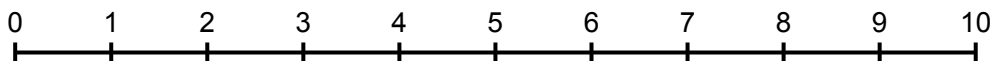
2. Double 3 = $3 + 3 =$ _____



3. Double 4 = $4 + 4 =$ _____



4. Double 5 = $5 + 5 =$ _____



 **Quick Practice - Write the answers:**

Double 1 = _____

Double 6 = _____

Double 7 = _____

Double 8 = _____