


Reading and Recording Time


Name: _____


Date: _____

Part A: Read the Analogue Clocks

Write the time shown on each clock in 12-hour format (include am or pm).







Part B: Convert 12-Hour to 24-Hour Time

1. 8:30 am = _____

2. 2:15 pm = _____

3. 11:45 am = _____

4. 6:20 pm = _____

5. 12:00 pm = _____

6. 9:50 pm = _____

Part C: Convert 24-Hour to 12-Hour Time

1. 14:30 = _____

2. 07:15 = _____

3. 19:45 = _____

4. 16:10 = _____

5. 00:00 = _____

6. 23:25 = _____

Part D: Word Problems

1. The school bell rings at 15:00. What time is this in 12-hour format?

2. A movie starts at 7:30 pm and runs for 2 hours. What time does it finish in 24-hour format?

3. If it is 10:45 am now, what time will it be in 3 hours and 30 minutes? (Write in 12-hour format)
